

Name _____

Date _____

Science Test

(SOL 1.2)


Directions: Identify the force. Circle push or pull.

1.



Push or Pull

2.



Push or Pull

3.



Push or Pull

4.



Push or Pull

5. A push or a pull is a _____.


- a. Family
- b. Friend
- c. Force
- d. Fight

6. Movement that creates sound comes from a _____.

- a. Video
- b. Vibration
- c. Vacuum
- d. Van


Directions: Circle the choice that describes the motion in the picture.

7.



- a. Circular
- b. Back and Forth
- c. Straight

8.



- a. Straight
- b. Curved
- c. Up and Down

9.




- a. Up and Down
- b. Curved
- c. Straight

10.



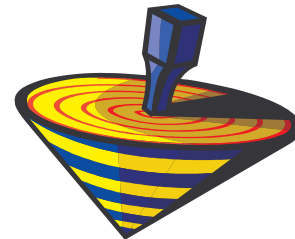
- a. Circular
- b. Back and Forth
- c. Straight

11.



- a. Straight
- b. Curved
- c. Up and Down

12.



- a. Back and Forth
- b. Circular
- c. Straight